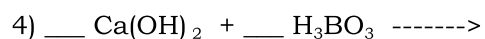
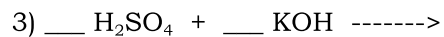


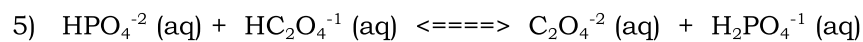
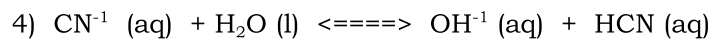
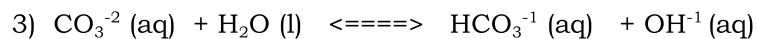
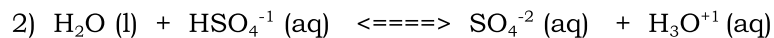
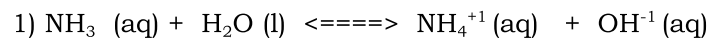
Acid-Base Reactions

Name: _____

Part 1: Complete and balance the following neutralization reactions.



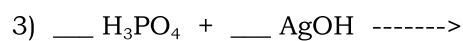
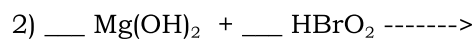
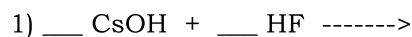
Part 2: Identify the acid, base, conjugate acid and conjugate base in each reaction:



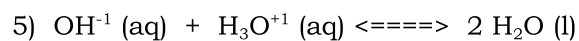
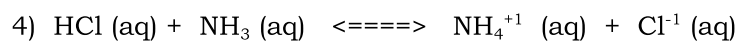
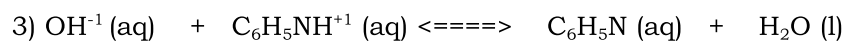
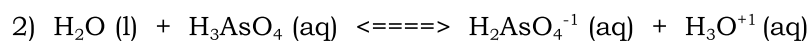
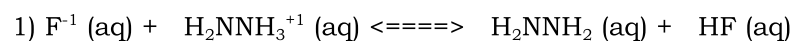
Acid-Base Reactions

Name: _____

Part 1: Complete and balance the following neutralization reactions.



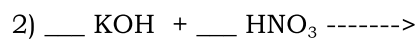
Part 2: Identify the acid, base, conjugate acid and conjugate base in each reaction:



Acid-Base Reactions

Name: _____

Part 1: Complete and balance the following neutralization reactions.



Part 2: Identify the acid, base, conjugate acid and conjugate base in each reaction:

